


THEORY SHEET 4

WRITE THE NAMES UNDER THESE NOTES :




JOIN THESE NOTES UP IN GROUPS OF 4 TO MAKE QUAVERS :



BARLINES

BARLINES HELP US TO COUNT MUSIC. DRAW ALONG THE DOTTED LINES IN THESE TUNES TO MAKE BARLINES. NOTICE THE DOUBLE BARLINE AT THE END OF EACH TUNE :



CAN YOU DO THESE MUSICAL SUMS ?

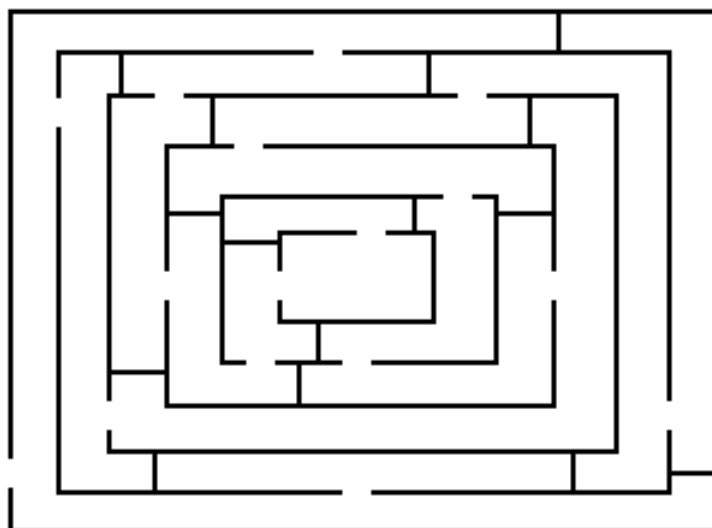
$$\text{quarter note} + \text{quarter note} + \text{quarter note} = \text{half note}$$

$$\text{quarter note} + \text{eighth note} + \text{quarter note} = \text{half note}$$

$$\text{half note} - \text{quarter note} - \text{quarter note} = \text{quarter note}$$

$$\text{quarter note} + \text{eighth note} + \text{quarter note} - \text{eighth note} = \text{half note}$$

FIND A WAY THROUGH THE MAZE TO GET TO THE PIANO....



TEACHER'S COMMENT